
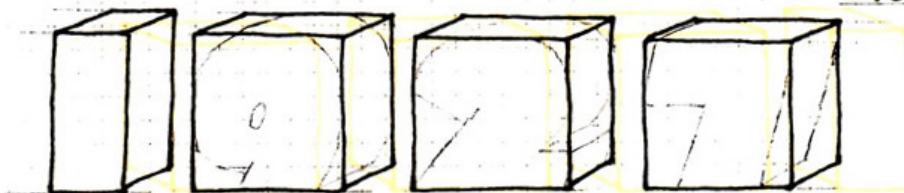


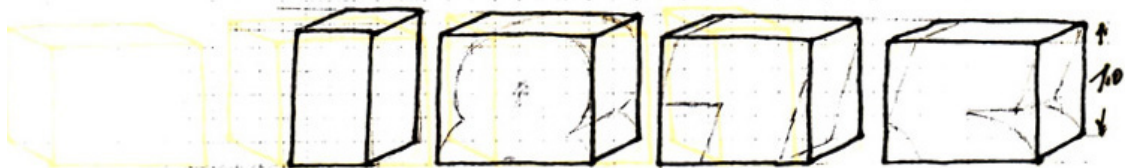
In hellem Granit, 12 Quader nach Mass roh ?
die 12 Zahlen, nach Mass roh ?



$1.6 \cdot 1.3 \cdot 0.65$	$1.55 \cdot 1.35 \cdot 0.65$	$1.5 \cdot 1.35 \cdot 0.65$	$1.45 \cdot 1.35 \cdot 0.65$ m
1.352	1.360	1.316	1.272
			<u>5,300 m³</u>



$1.4 \cdot 0.6 \cdot 0.6$	$1.35 \cdot 1.2 \cdot 0.6$	$1.3 \cdot 1.2 \cdot 0.6$	$1.25 \cdot 1.2 \cdot 0.6$ m
0,504	0,972	0,936	0,900
			<u>3,312 m³</u>



$1.15 \cdot 1.2 \cdot 0.55$	$1.1 \cdot 1.2 \cdot 0.55$	$1.05 \cdot 1.1 \cdot 0.55$	$1 \cdot 1.1 \cdot 0.55$ m
0,347	0,726	0,635	0,605
			<u>2,313 m³</u>
			<u>10,925 m³</u>